

Wednesday 8th April

Today is: TTRS, Spellings, Reading, Maths, English and History.

Bonus Activity: Play hide and seek.

TT Rock Stars



<https://ttrackstars.com/>

Spend 15 minutes
answering questions.

See if you can beat
your high score or best
time.

Reading Time.

Spend 20 minutes reading your school book. You can take your AR quizzes at home using the link on slide 3

You could also:

- Read a cookbook
- Look for your spelling words in the book



Spellings

Learning how to spell

look 

say 

cover 

write 

check 

 twinkl www.twinkl.co.uk
Quality Standard Approved

Your spellings are:

1. circle
2. complete
3. describe
4. difficult
5. disappear
6. earth
7. eighth
8. enough

Extension Activities:

Spelling Selection

Blue Vowels


Write out each of your words. Go over the vowels in each word using blue pencil.

Example of Challenge

Spelling Selection

Tell a Story

Use all of your spelling words in a short story that makes sense! Underline your words with a ruler.



Spelling Selection

F Spelling Flowers

Draw a big flower. Write each of your spelling words on one of the petals!



Spelling Selection

Across and Down

Write your words across and down, sharing the same first letter.

Example
x
a
m
p
l
e

Mental Maths

Click here
for
answers

1) $142 - 10$

2) Half of 32

3) Multiply 7 by 3

4) Round 126 to the nearest 10

5) Double £1.24

How much money?

6)



7) $300 + \underline{\quad} = 391$

How many lines of symmetry?

8)

9) $12 - 6 + 8$

10) How much less than 2 metres is 180cm?

Challenge Questions

11) 85 minutes = 1 hour _____ minutes

12) How many months in 3 years?



13) On a fishing trip, Flame caught 22 fish. Captain caught 27. How many more fish did Captain catch?

14) Tyger gets 7 out of 10 in a times tables test. What fraction is this?

15) Frazer gets paid 50p a day. How much does he get in a week?

16) Sally buys 3 pens for £12. How much did 1 pen cost?

Mental Maths: ANSWERS

1)	$142 - 10$	132
2)	Half of 32	16
3)	Multiply 7 by 3	21
4)	Round 126 to the nearest 10	130
5)	Double £1.24	£2.48
6)	How much money? 	£4.05
7)	$300 + \underline{\quad} = 391$	91
8)	How many lines of symmetry? 	2
9)	$12 - 6 + 8$	14
10)	How much less than 2 metres is 180cm?	20cm

Challenge Questions







11)	85 minutes = 1 hour _____ minutes	25
12)	How many months in 3 years?	36
13)	On a fishing trip, Flame caught 22 fish. Captain caught 27. How many more fish did Captain catch?	5
14)	Tyger gets 7 out of 10 in a times tables test. What fraction is this?	$\frac{7}{10}$
15)	Frazer gets paid 50p a day. How much does he get in a week?	£3.50
16)	Sally buys 3 pens for £12. How much did 1 pen cost?	£4

Maths

Fill in the boxes with the correct fractions.

Click
here for
answers

A. What fraction of the food has been eaten.
Write the answer as a fraction in the next box.

1. 	$2/4$
2. 	
3. 	
4. 	
5. 	
6. 	







B. What fraction of the food has been eaten. Draw the answer in the next box.

7. Najim has eaten $1/5$ of the chocolate bars.	
8. Steve has eaten $2/3$ of the crisps.	
9. Lynda has eaten $1/2$ of the chips.	
10. Desmond has eaten $3/4$ of the cake.	





Maths: ANSWERS

Fill in the boxes with the correct fractions.

A. What fraction of the food has been eaten.
Write the answer as a fraction in the next box.

1. 	$2/4$
2. 	$3/5$
3. 	$1/4$
4. 	$2/5$
5. 	$1/4$
6. 	$1/2$

B. What fraction of the food has been eaten. Draw the answer in the next box.

7. Najim has eaten $1/5$ of the chocolate bars.	
8. Steve has eaten $2/3$ of the crisps.	
9. Lynda has eaten $1/2$ of the chips.	
10. Desmond has eaten $3/4$ of the cake.	

Maths



Click
here for
answers

1. Would you rather...? $\frac{1}{4}$ of £4 $\frac{1}{2}$ of £8 $\frac{1}{3}$ of £6

2. Would you rather...? $\frac{1}{4}$ of £8 $\frac{1}{2}$ of £4 $\frac{1}{3}$ of £9

3. Would you rather...? $\frac{2}{3}$ of £36 $\frac{3}{4}$ of £36 $\frac{1}{5}$ of £55

4. Would you rather...? $\frac{2}{5}$ of £35 $\frac{1}{8}$ of £96 $\frac{3}{6}$ of £30

5. Would you rather...? $\frac{4}{5}$ of £25 $\frac{2}{3}$ of £27 $\frac{3}{10}$ of £60

6. Would you rather...? $\frac{3}{8}$ of £48 $\frac{3}{4}$ of £44 $\frac{5}{9}$ of £45

7. Would you rather...? $\frac{2}{6}$ of £54 $\frac{3}{7}$ of £49 $\frac{4}{12}$ of £60

8. Would you rather...? $\frac{5}{6}$ of £72 $\frac{8}{10}$ of £70 $\frac{7}{9}$ of £72

Use your knowledge and understanding from previous lessons to help you answer the questions.

You will have to work out each fraction and then decide which one is worth more.

Maths ANSWERS

1. Would you rather...? $\frac{1}{4}$ of £4

$\frac{1}{2}$ of £8

$\frac{1}{3}$ of £6

2. Would you rather...? $\frac{1}{4}$ of £8

$\frac{1}{2}$ of £4

$\frac{1}{3}$ of £9

3. Would you rather...? $\frac{2}{3}$ of £36

$\frac{3}{4}$ of £36

$\frac{1}{5}$ of £55

4. Would you rather...? $\frac{2}{5}$ of £35

$\frac{1}{8}$ of £96

$\frac{3}{6}$ of £30

5. Would you rather...? $\frac{4}{5}$ of £25

$\frac{2}{3}$ of £27

$\frac{3}{10}$ of £60

6. Would you rather...? $\frac{3}{8}$ of £48

$\frac{3}{4}$ of £44

$\frac{5}{9}$ of £45

7. Would you rather...? $\frac{2}{6}$ of £54

$\frac{3}{7}$ of £49

$\frac{4}{12}$ of £60

8. Would you rather...? $\frac{5}{6}$ of £72

$\frac{8}{10}$ of £70

$\frac{7}{9}$ of £72

Use your knowledge and understanding from previous lessons to help you answer the questions.


You will have to work out each fraction and then decide which one is worth more.

English

Write a definition for each of the words listed.

Write the definitions as if they were for a dictionary, but do not copy the definition from the dictionary!

Remember that words in a dictionary are always in alphabetical order.



canopy
rainforest
tropical
climate
habitat
endangered
environment
extinct
forest
deforestation
conservation
ecosystem
temperature
leafy
humid



You could use a dictionary if you have one at home or use the link to access the online dictionary:

<https://kids.worldsmyth.net/word/>

Geography

Types of Forests



There are four main types of forests around the world:



temperate deciduous forest

Types of Forests



There are four main types of forests around the world:



temperate coniferous forest

Geography

Types of Forests



There are four main types of forests around the world:



boreal forest

Types of Forests



There are four main types of forests around the world:



tropical rainforest

Geography

Types of Forests



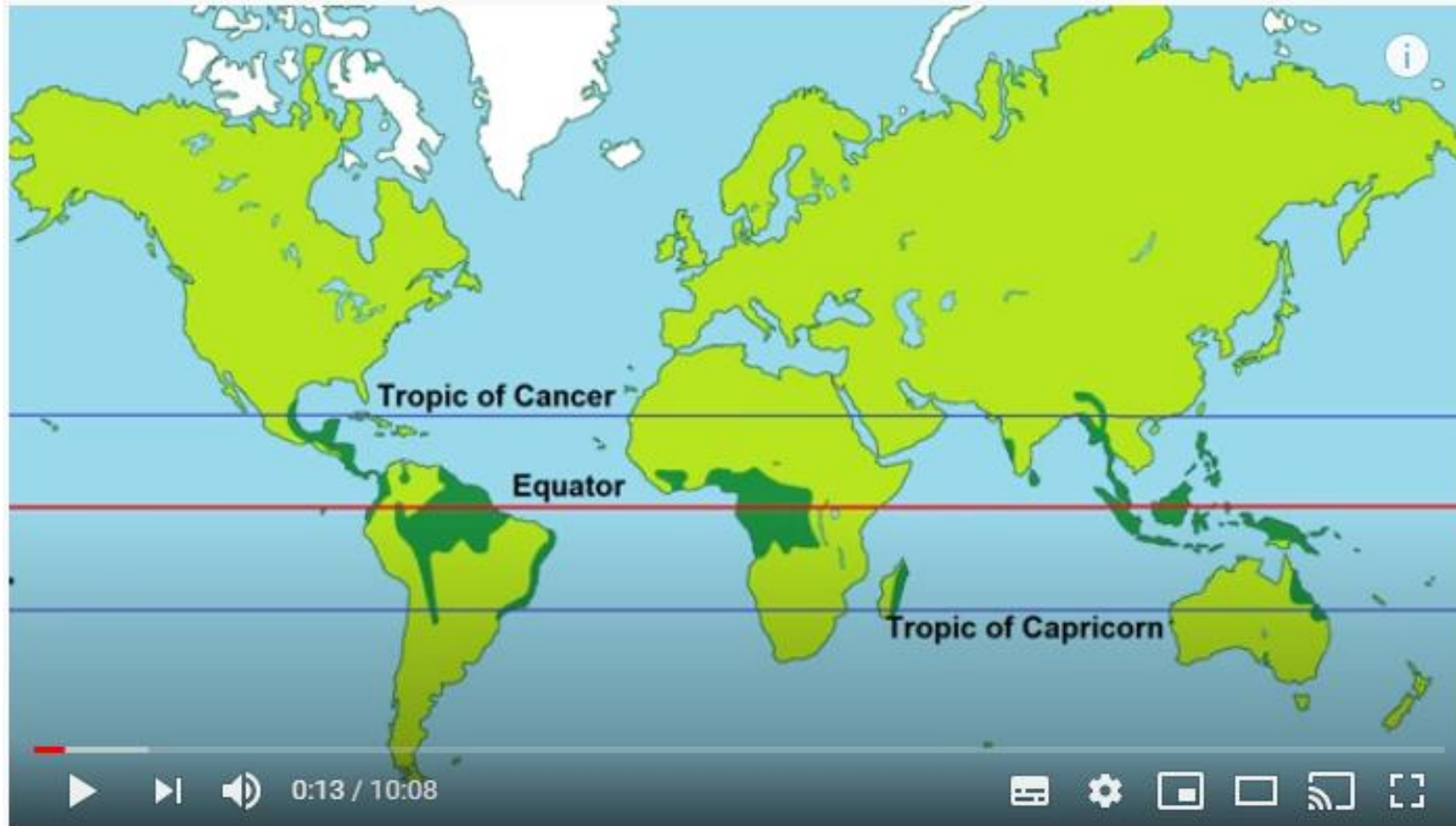
Which kinds of forest do we find in the UK? Which ones are not found in the UK?



Have you heard about rainforests before?

What do you know about them?

Geography



Youtube search: facts about tropical rainforests

<https://www.youtube.com/watch?v=6uUB7LjJtM>

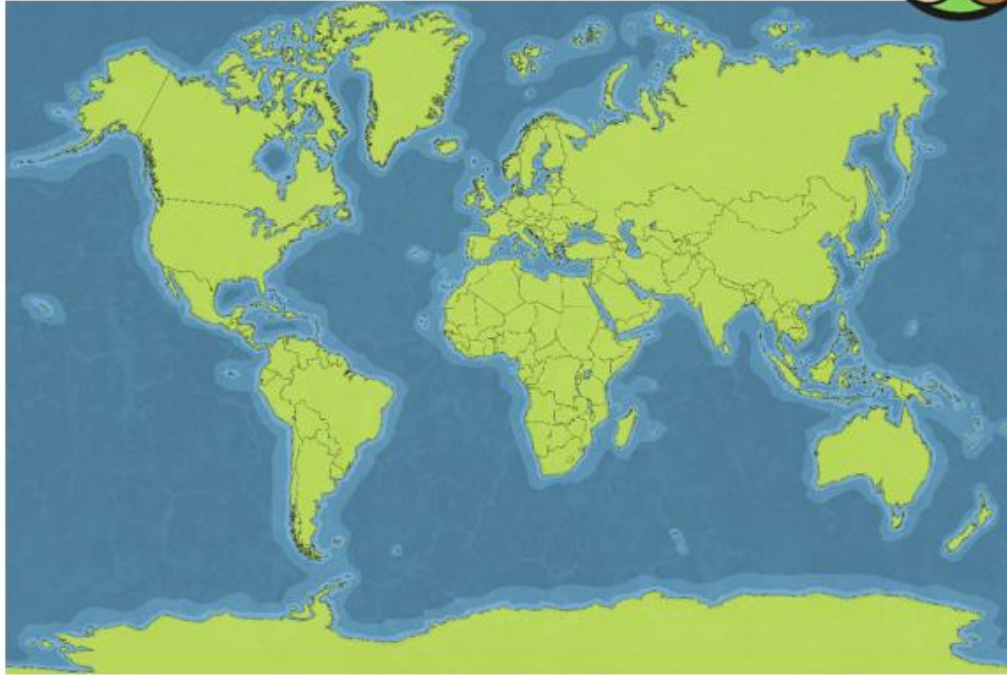
Geography

Where Are Rainforests Found?



Rainforests are found in many countries, such as:

- Brazil
- Peru
- Australia
- Indonesia
- Bolivia
- Ecuador
- Guyana
- India
- Malaysia
- Mexico
- Venezuela



Do you recognise any of these country names?

Do you know where they are located on the map?

On the next slide you will have to try and name the countries around the world where rainforests can be found. Some you may know others you may need some help. You can use an atlas if you have one or the websites listed below.

Geography

Click here for answers

Can you match the country names to the correct labels?

Brazil
Bolivia
Australia
Malaysia
Indonesia
Cameroon
Gabon
Congo
Madagascar
Honduras
Guatamala
Ghana

Use google maps or follow the link to help you answer the questions:


https://www.ilibrarian.net/flagmaps/world_map_large.jpg

Geography: ANSWERS



Bonus Activity: Hide and Seek.

Spend some time playing a game of hide and seek. You could play it with the people in your home. Can you find any interesting places to hide (safely of course).



Why not try this with the people in your house:

Sardines (Reverse Hide and Seek) Sardines is an active game that is played like hide and go seek — only in reverse! One person hides, and everyone else searches for the hidden person. Whenever a person finds the hidden person, they quietly join them in their hiding spot. Soon, the hidden group starts to look like a bunch of sardines!